



Certificate of Musicianship™

SCM Musical Knowledge Worksheet

Name: _____ Instrument: _____

Student Number: _____ Teacher's Number: _____

Score _____ Check one: passed _____ needs more study _____

Passing Score: 70% or higher.

Violin Level IX

Copyright © 2014 by the Satori Certificate of Musicianship.

2014 SCM Violin Level III

1. IDENTIFY these thirds as major or minor

2. WRITE the missing notes for each third. Find them by counting half-steps on the keyboard on the previous page. (A down arrow means write a note below the given note.

An up arrow means write a note above the given note.)

3. WRITE these thirds

4. IDENTIFY the triad as major or minor.

5. WRITE the major and minor keys for each key signature. Write the major keys with capital letters and the minor keys lower case.

Example

Maj. key A^b _____ _____ _____ _____ _____ _____

min. key f _____ _____ _____ _____ _____ _____

6. WRITE the major key and the key signature for each minor key.

Example

Maj. key D _____ _____ _____ _____ _____ _____

min. key b g $f^\#$ c $d^\#$ d b^b

7. WRITE major triads above these roots.


Example

8. WRITE minor triads above these roots.

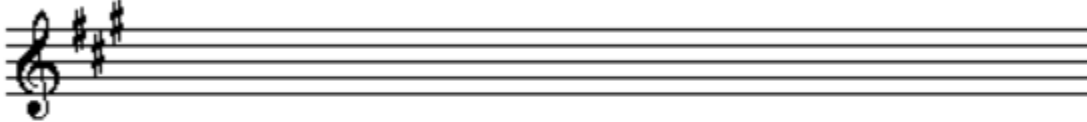
Example

9. WRITE these minor scales.

natural minor



melodic minor



harmonic minor



natural minor



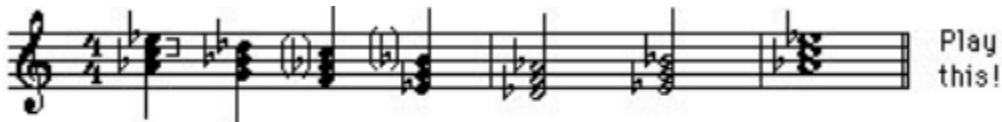
melodic minor



10. IDENTIFY the bottom third of the triad as major or minor.



11. IDENTIFY the top third of the triad as major or minor.



Play this!

12. WRITE major triads above these roots.

Example



13. WRITE minor triads above these roots.

Example

